

KHIDMAT FOUNDATION TALENT TEST

KFTT - SEP - 2024

Study Material



KHIDMAT FOUNDATION, SHAHADA, Dist: Nandurbar



**SUPER
AUTOMOBILES
VIMAL SHRUSHTI
SUPER
CONSTRUCTION &
DEVELOPERS
MAAJEE NAGAR**

TM NO.: 3553844

Since 1990

**Jalgaon
BRAND
Special MASALA**

**JALGAON
SPECIAL
MASALA
CENTRE**

Mohsin Bagwan & Shoaib Bagwan
Garib Nawaz Colony, SHAHADA
Contact: 9977112886 / 7058040270
Jalgaon Brand Special Masala
Dealer of all types of Spices

KHOKHAR ENTERPRISES

Prop: Riyaz Khokhar
At: Lonkheda, SHAHADA
Contact: 9422539262

GLOBAL ENTERPRISES

Prop: Irshad Khohar
Lonkheda Bypass, SHAHADA
Contact: 9764241900
Building Material Suppliers

HI-TECH COMPUTERS

Prop: Saquib Pathan
Shop No.2, Purushottam Market
Unit-3, Opp. PWD Office,
SHAHADA: 9423027286

DISCOUNT COUPEN
*Buy above 1499 & get 10%
discount on total price**
**(Bring book along with you to
get the discount)*

Chapter 1: Word Formation

There are two words, left & right. Choose one letter from left word and move to right word, creating two new words. You cannot change position of any letter of left word, but the letter you move from left can fit anywhere in the right word.

Example: 1

STOOP

FLAT

(A) T (B) P (C) O (D) S

Answer: (C)

Explanation: "O" is moved from the left word on the right, formed two new words. "STOP" and "FLOAT"

Example 2:

THEN

TANK

(A) E (B) H (C) N (D) T

Answer: (B)

Explanation: "H" is moved from the left word on the right, formed two new words. "TEN" and "THANK"

CLASSWORK

1.

MAN

FOR

(A) N (B) A (C) M (D) R

2.

WET

EAR

(A) E (B) W (C) M (D) T

Chapter 1: Word Formation

CLASSWORK

3. TIME ZOO
(A) E (B) I (C) M (D) T
4. COAT FIR
(A) O (B) T (C) A (D) C
5. TWIN HEAR
(A) T (B) N (C) I (D) W
-

HOMEWORK

1. STARE HOP
(A) R (B) A (C) E (D) T
2. BRAND COW
(A) B (B) D (C) N (D) R
3. HOARD HELL
(A) O (B) A (C) R (D) D
4. HOVER EATS
(A) V (B) O (C) H (D) R
5. CLIMB RASH
(A) I (B) C (C) M (D) B
6. SCARE STEP
(A) A (B) R (C) S (D) E

Chapter 2: Analogy

A particular relationship is given and another relationship has to be identified from the alternatives provided.

Example 1: Maharashtra : Mumbai :: Karnataka : ?

(A) Chennai (B) Bengaluru (c) Delhi (d) Mysuru

Answer: (B)

Explanation: Mumbai is capital of Maharashtra, similarly, Bengaluru is capital of Karnataka.

Example 2: Time : Seconds :: Length : ?

(A) Degree (B) Liter (C) Minute (D) Meter

Answer: (D)

Explanation: Time is measured in Seconds, similarly, Length is measured in Meters.

CLASSWORK

1. India : Rupees :: US : ?

(A) Dollar (B) Yen (C) Pound (D) Dinar

2. Ministers : Council :: Players : ?

(A) Gang (B) Army (C) Team (D) Crowd

3. Newspaper : Press :: Cloth : ?

(A) Tailor (B) Fiber (C) Cotton (D) Mill

4. Mass : Kilogram :: Volume : ?

(A) Quintal (B) Hectare (C) Meter (D) Liter

Chapter 2: Analogy

HOMEWORK

1. Giant : Dwarf :: Genius : ?
(A) Wicked (B) Gentle (C) Idiot (D) Tiny
2. Ahmadabad : Gujarat :: Bhopal : ?
(A) Orissa (B) Haryana (C) Punjab (D) Madhya Pradesh
3. Melt : Liquid :: Boil : ?
(A) Ice (B) Evaporate (C) Solid (D) Crystal
4. Bird : Fly :: Snake : ?
(A) Hole (B) Crawl (C) Walk (D) Run
5. Tree : Forest :: Grass : ?
(A) Field (B) Farm (C) Lawn (D) Mountain
6. Drama : Stage :: Tennis : ?
(A) Tournament (B) Racket (C) Net (D) Court
7. Muslim : Masjid :: Sikh : ?
(A) Church (B) Fire Temple (C) Gurudwara (D) Mandir
8. Ocean : Water :: Glacier : ?
(A) Cave (B) Ice (C) Mountain (D) Refrigerator
9. Physician : Treatment :: Judge : ?
(A) Court (B) Lawyer (C) Punishment (D) Judgment
10. Calendar : Dates :: Dictionary : ?
(A) Word (B) Book (C) Language (D) Vocabulary

Chapter 3: Using Letters for Numbers

You are required to find the missing numbers (?) that will balance the equation or complete the number sequence.

You also require to replace LETTERS with NUMBERS and solve it with order of operations (BODMAS)

Example 1: $4 + 3 \times 3 + 4 = 6 + 4 + ?$

(A) 3 (B) 5 (C) 7 (D) 4

Answer: (C)

Explanation:

Steps to solve equation on left side:

$$= 4 + 3 \times 3 + 4$$

$$= 4 + 9 + 4$$

$$= 17$$

Example 2: If $P=4$, $Q=3$, $R=20$, $S=15$ then $S \div Q \times P = ?$

(A) P (B) Q (C) R (D) S

Answer: (C)

Explanation:

$$= S \div Q \times P$$

$$= 15 \div 3 \times 4$$

$$= 5 \times 4$$

$$= 20$$

Chapter 3: Using Letters for Numbers

CLASSWORK

1. $8 + 5 \times 2 - 1 + 8 \div 2 = 14 - 2 \times 3 + ?$

- (A) 3 (B) 7 (C) 9 (D) 13

2. If $P = 2$, $Q = 4$, $R = 1$, $S = 20$ then $R + S \div Q \times R - P = ?$

- (A) P (B) Q (C) R (D) S
-

HOMEWORK

1. $9 \div 3 + 6 - 6 \times 1 = 6 - 1 \times ?$

- (A) 9 (B) 4 (C) 3 (D) 5

2. $4 + 2 + 2 - 2 \times 1 \div 2 = 9 - ? \times 2 \div 1$

- (A) 1 (B) 3 (C) 9 (D) 8

3. $(8 - 4) \div 4 + (4 - 5) = ? \times (4 - 2)$

- (A) 2 (B) 4 (C) 1 (D) 0

4. If $P = 80$, $Q = 5$, $R = 25$, $S = 20$ then $(S \times Q) - P + (R \div Q) = ?$

- (A) R (B) Q (C) S (D) P

5. If $P = 30$, $Q = 5$, $R = 2$, $S = 50$ then $P \div Q \times (S \div Q) - (Q \times R) = ?$

- (A) P (B) R (C) Q (D) S

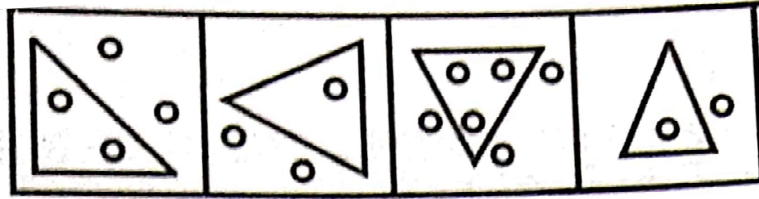
6. If $P = 20$, $Q = 40$, $R = 10$, $S = 2$ then $(P \div R) - S + (Q \div S) = ?$

- (A) S (B) R (C) P (D) Q

Chapter 4: Odd on Out

Identify the odd one out

Example 1:




(A) (B) (C) (D)

Answer: (B)

Explanation: In all other figures, equal number of circles are present inside & outside the triangle except (B).

Example 2:



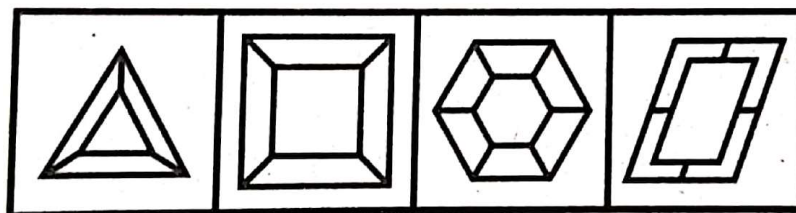
(A) (B) (C) (D)

Answer: (D)

Explanation: In all figures "Hand" and "Legs" are different, but in (D) both "Hand" and "Legs" are same.

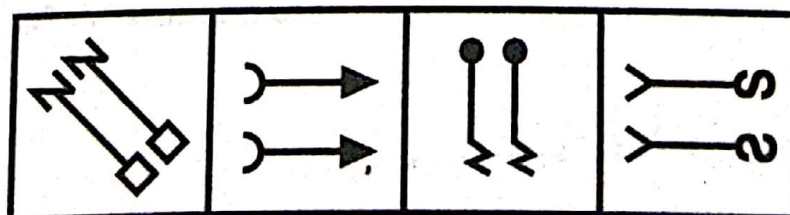
CLASSWORK

1.



(A) (B) (C) (D)

2.




(A) (B) (C) (D)

Chapter 4: Odd on Out

Homework

1.



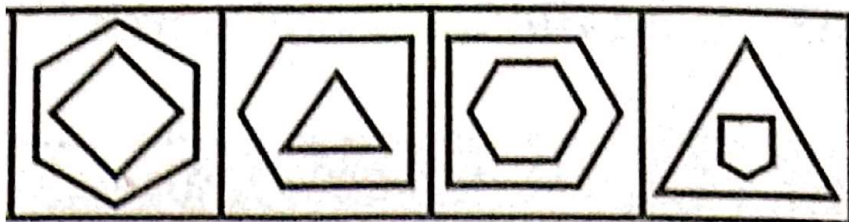
(A)

(B)

(C)

(D)

2.



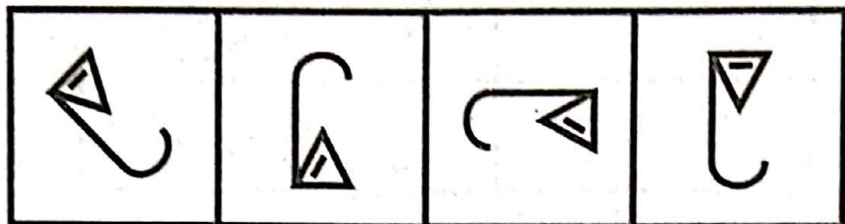
(A)

(B)

(C)

(D)

3.




(A)

(B)

(C)

(D)

4.



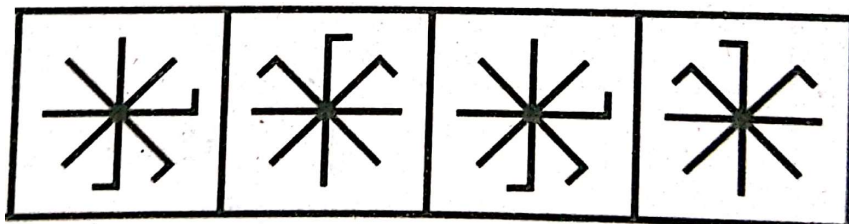
(A)

(B)

(C)

(D)

5.



(A)

(B)

(C)

(D)

Chapter 5: Puzzle Test

In this type of questions, some clues regarding seating or placing sequence (linear or circular) of some type of persons or items are given. The candidate is required to form the proper sequence using these clues and answer the give questions accordingly.

Example 1:

Six students K, P, R, X, S, & Z seating in a row.

- S & Z are seating in the center and Z is seating right of S.
- K & P are at the ends.
- R is seating on the left of K

Q.1: Who is seating right of P?

- (A) R (B) Z (C) K (D) X

Answer: (D)

Q.2: Who is seating right end of row?

- (A) K (B) P (C) R (D) S

Answer: (A)

Q.3: Who is seating left of Z?

- (A) R (B) S (C) P (D) K

Answer: (B)

Q. 4: Who is seating left end of row?

- (A) K (B) X (C) P (D) Z

Answer: (C)

Chapter 5: Puzzle Test

Explanation:

- K & P are at the ends.
- R is seating on the left of K

P _ _ _ R K

- S & Z are in the center and Z is seating right of S.

P X S Z R K

CLASSWORK

Nine students seating in a row, they are J, K, L, M, N, O, P, Q and R.

- L is at the right of M and at third place at the right of N.
- K is at one end of the row.
- Q is seated next to both O & P.
- O is at the third place at the left of K.
- J is next to left of O.

Q.1: Who is seating at the center of the row?

(A) Q (B) P (C) K (D) J

Q.2: Who is at the other end of the row?

(A) J (B) N (C) P (D) R

Q.3: Which of the following statement is true?

(A) R is seating next to K (B) Q is seating center of the row
(C) P is seating end of the row (D) P is seating next to K

Q.4: Which of the following statement is false?

(A) O is seating between J & Q (B) K is seating at the end
(C) M is seating at the end (D) R is seating left of M

Chapter 5: Puzzle Test

HOMEWORK

Eight books are kept one over other. Counting from the top, the second, fifth & sixth book are of Science. Two books on Science are between two books on History. One book of Science is between two books on Math while the book at the top of the book of English is a book of History.

Q.1: Which book is at the top?

(A) English (B) Math (C) Science (D) History

Q.2: Which book is fourth from the top?

(A) Math (B) English (C) History (D) Science

Q.3: Which book is at the bottom?

(A) English (B) Science (C) Math (D) Science

Seven person are standing in a row. Q is standing left to R but right to P. O is standing right to N and left to P. Similarly, S is standing right to R and left to T.

Q.1: Who is standing right most corner of the row?

(A) P (B) Q (C) S (D) T

Q.2: Who is standing in the center of the row?

(A) T (B) R (B) Q (D) N

Q.3: Who is standing in the left most corner of the row?

(A) N (B) Q (C) P (D) O

KFTT – SEP – 2023 ACHIEVERS – URDU SECTION (8th–10th)

1st Prize Sahil Raza Majid Ansari (10th) Iqra Urdu Medium School	2nd Prize Shaikh Asa Aasif (9th) Iqra Urdu Medium School	
3rd Prize Laiba Imran Pathan (10th) Sir Sayyed Urdu Medium School	4th Prize Ansari Iqra Naaz (9th) Nishat Urdu Medium School	5th Prize Sayyed Laiba Shakir (10th) Iqra Urdu Medium School

KFTT – SEP – 2023 ACHIEVERS – OPEN SECTION (8th-10th)

1st Prize Khatik Anas Shahid (8th) Ideal English Medium School	2nd Prize Ansari Juned Salim (10th) Ideal English Medium School	3rd Prize Fatima Mohd. Rafiq Isani (10th) Chavara English Medium School
---	--	--

KFTT – SEP – 2023 ACHIEVERS – OPEN SECTION (11th-12th)

1st Prize Farhan Rahim Mansuri (12th) Seth. V. K. Shah Jr. College	2nd Prize Anshara Sajid Ansari (12th) Nishat Jr. College	3rd Prize Mubin Altaf Hasmani (12th) PSGVP Jr. College
---	---	---

MOHD. FARUK HAJI RAFIK FRUIT CO.

Prop: Faruk Bagwan
Fruit Merchant, Commission
Agent & Order Supplier
Bagwan Galli, SHAHADA
Contact: 9922000313

HINDUSTAN STEEL

Main Road, SHAHADA
Supplier of Steel & Iron

INDIA SUBMERSIBLE

Prop: Hafiz Ansari
Main Road, SHAHADA
Dealer of Submersible Pump,
Cables, Pipes, Spares etc.
Contact: 9420604257

ROYALE` DUNES DATES

Tabish Isani
Importer of Premium Dates
Speciality in Madina Dates
www.royaledunes.com
info@royaledunes.com
Contact: 9766470707

MEMON PROPERTIES

Prop: Haji Altaf Bhai Isani
Shop No. 3, Purushottam
Market Unit-3, Opp. PWD
Office, SHAHADA
Real estate & property dealer

HAJI NAJIM ISMAIL BAGWAN & CO.

Prop: Nazim Bagwan
Fruit Commission Agent &
Order Supplier
Near Khurshid Bhai Hospital,
Garib Nawaz Colony, SHAHADA
Contact: 9665565651

KHWAJA STEEL AND BUILDING MATERIALS - SCRAP

**Prop: Riyazoddin Mohiyoddin
Ansari (Lallu Seth)**
New Prakasha Road, SHAHADA
9822287725, 9423218177
Dealer of Building Material
Suppliers & Scrap Merchant

RAJKOT TRADERS

Prop: Tauseef Momin

New Prakasha Road, SHAHADA

Contact: 9881215791

Wholesale/Retail supplier of
Submersible Pump, Pipes,
Cables etc.

KISAN SUBMERSIBLE

Prop: Siraj Bhai

Opp. Manish Petrol Pump, New

Prakasha Road, SHAHADA

Contact: 9922767514

Wholesale/Retail supplier of
Submersible Pump, Pipes etc.

BHARMAL PROVISION

Firoz Irshad Husain Raja

Contact: 9421528463

Johor Irshad Husain Raja

Contact: 9422778752

Garib Nawaz Colony, SHAHADA

Retail/Wholesale Kirana
Supplier

GOLDEN SUBMERSIBLE

Prop: Nafees Ansari

Khetiya Road, SHAHADA

Contact: 9096835835

Wholesale/Retail supplier of
Submersible Pump, Pipes,
Cables, Spares etc.

A-ONE TRADERS

Prop: Abid Mewati

Opp. Swaraj Tractor,

SHAHADA: 8446383435

Wholesale/Retail supplier of
Submersible Pump, Pipes,
Cables etc.

MEMON STEEL

Prop: Rahil Memon

Memon Haji Isak Colony,

Khetiya Road, SHAHADA

Contact: 8983939393

Wholesale/Retail supplier of
building material.