

KHIDMAT FOUNDATION TALENT TEST
(KFTT – SEP – 2023)

Number of questions: 80

Duration: 2 Hours

1. All questions are compulsory

SET - D

Part – 1: Jumbled Words

Q.1: Find “VEHICLE”

(A) SUB (B) MBILEO (C) TASND (D) IVEF

Q.2: What contains “WATER”

(A) EIHGT (B) SHESO (C) ASE (D) HIRTS

Q.3: Find “FRUIT”

(A) SOSHE (B) RANGEO (C) TCHWA (D) GAB

Q.4: Find “NUMBER”

(A) EINN (B) ABG (C) USB (D) OGLD

Q.5: Find “DAY”

(A) OEN (B) IOLN (C) BLETA (D) ADYFIR

Q.6: Used for “WRITING”

(A) SRHIT (B) ENP (C) MGOAN (D) HIAR

Q.7: Find “ANIMAL”

(A) TGEIR (B) LCKO (C) RONI (D) AINLS

Q.8: What contains “AIR”

(A) LATPOP (B) ERPAP (C) LLOR (D) LLOONAB

Q.9: Find “BIRD”

(A) OGLD (B) OGERAN (C) PAOTRR (D) AHND

Q.10: Find “COUNTRY”

(A) MMUBIA (B) ALAKER (C) NPURAG (D) DIAIN

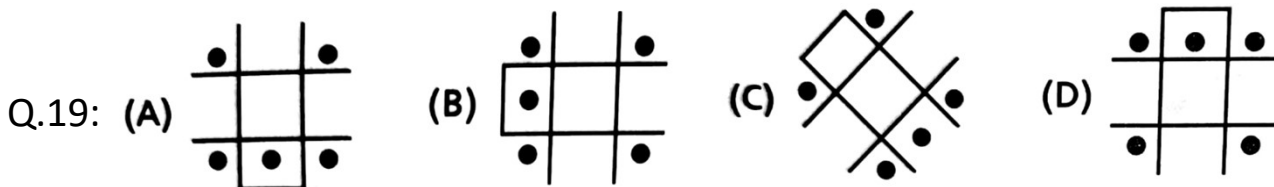
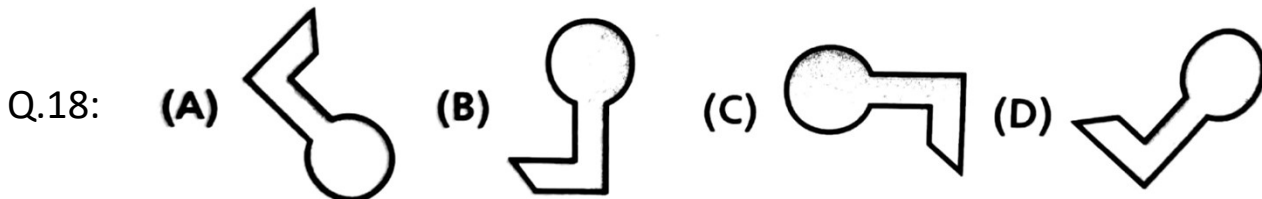
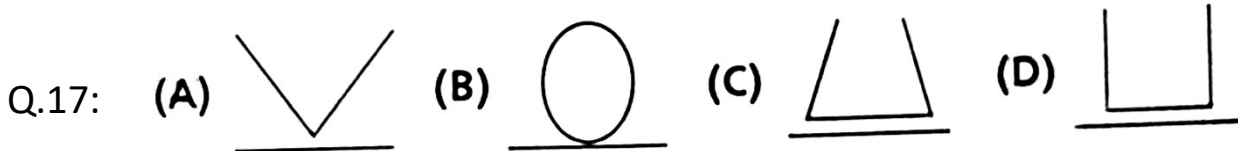
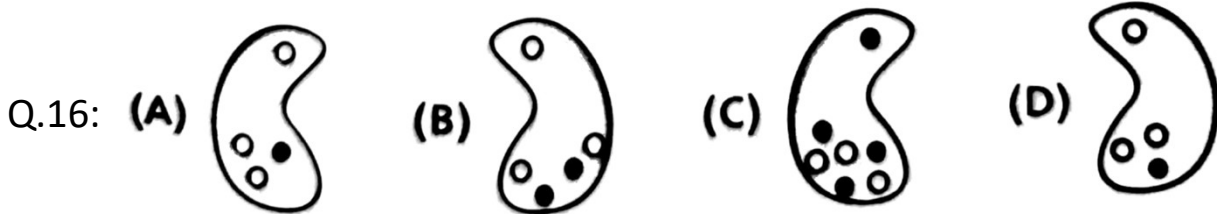
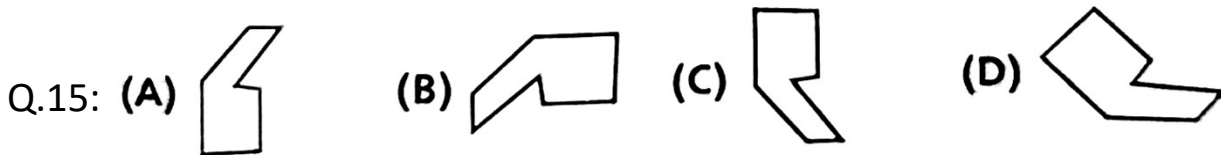
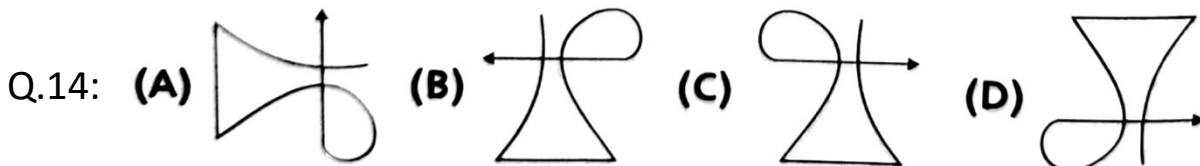
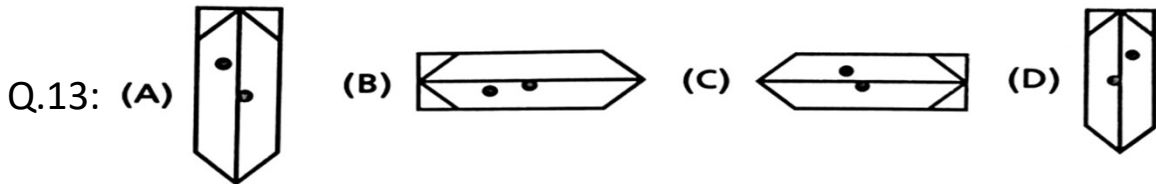
Q.11: Organ used for "TALKING"

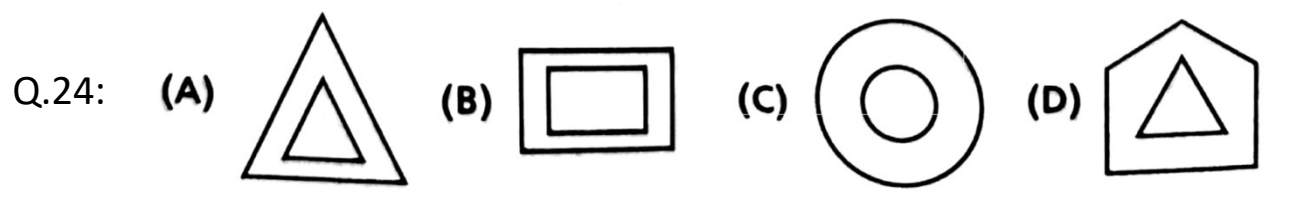
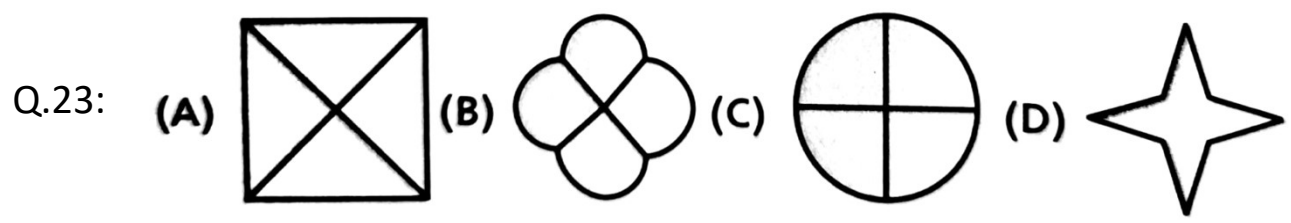
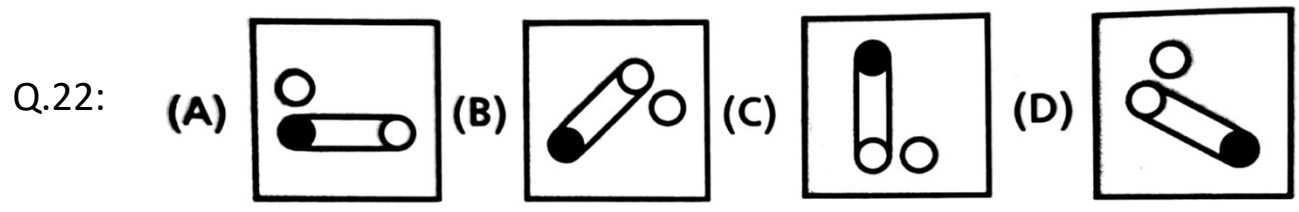
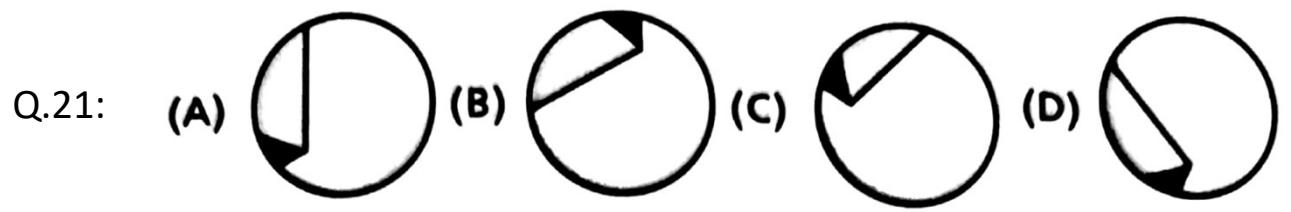
- (A) ESEY (B) THMOU (C) LGES (D) RSHAI

Q.12: Find "CITY"

- (A) GJUARTA (B) NIDAI (C) UNEP (D) SAMAS

Part – 2: Which one is different?





Part – 3: Solve with BODMAS Rule

Q.25: $4 - 2 \div 2 + (2 \times 2)$
 (A) 5 (B) 4 (C) 7 (D) 8

Q.26: $9 \times 9 \div 9$
 (A) 1 (B) 99 (C) 9 (D) 0

Q.27: $2 - 8 (7 \div 7) + 12$
 (A) 6 (B) 18 (C) 24 (D) 12

Q.28: $8 - 2 + (5 \times 2) - 3 \div 3$
 (A) 22 (B) 21 (C) 6 (D) 15

Q.29: $(5 \times 5) - (5 \div 5) \times 2 - (5 \times 3)$
(A) 8 (B) 33 (C) 37 (D) 15

Q.30: $2 - 1 \div 1 \times 2 + 9$
(A) 2 (B) 9 (C) 1 (D) 11

Q.31: $6 + 9 \times 2 - 2 \times 9$
(A) 0 (B) 6 (C) 1 (D) 9

Q.32: $7 - 1 - 3 + 4 \times 2 - 1$
(A) 10 (B) 13 (C) 0 (D) 7

Q.33: $6 - 5 \times 1 + 1$
(A) 2 (B) 0 (C) 1 (D) 12

Q.34: $5 + 3 - 3 \times 2 \div 1$
(A) 10 (B) 3 (C) 1 (D) 2

Q.35: $6 + (6 \div 3)$
(A) 8 (B) 4 (C) 12 (D) 18

Q.36: $2 (9 \div 3) - 6$
(A) 6 (B) 0 (C) 9 (D) 3

Q.37: $3 (9 \div 3) - 6 \times 2 \div 2$
(A) 6 (B) 0 (C) 3 (D) 1

Q.38: $8 + 9 + 2 - 8 - 1 \times 5 \div 1$
(A) 5 (B) 50 (C) 25 (D) 6

Q.39: $1 + 8 - 8 + 9 - 9 + 1 \times 2 \div 1$
(A) 1 (B) 9 (C) 3 (D) 2

Q.40: $9 + (5 - 2) (2 \div 2) - 2$
(A) 12 (B) 2 (C) 9 (D) 10

Q.41: $(1 \div 1) (2 \div 2) (3 \div 3) (1 \times 1)$
(A) 4 (B) 1 (C) 13 (D) 7

Part – 4 : Puzzle Test

Explanations for Question 42 to 45

- i) Zoya & Ruby have Bottle & Eraser**
- ii) Only Farah have Bag others do not have**
- iii) Shirin have Scale, Bottle & Eraser**

Q.42: Who have Bottle & Scale?

(A) Zoya (B) Shirin (C) Farah (D) Ruby

Q.43: Who have bag?

(A) Ruby (B) Zoya (C) Shirin (D) Farah

Q.44: What Shirin do not have?

(A) Bag (B) Bottle (C) Scale (D) Eraser

Q.45: Who do not have Bag & Scale?

(A) Zoya & Shirin (B) Zoya & Ruby (C) Shirin (D) Farah

Explanations for Question 46 to 50

- i) Zaid & Feroz like Maths & History**
- ii) Karim likes Hindi, English & Science**
- iii) Rehan does not like Maths & Science**
- iv) Nasir likes all subjects but does not like History**

Q.46: Who likes Hindi but does not like Science?

(A) Zaid (B) Karim (C) Nasir (D) Rehan

Q.47: Which subject Karim does not like?

(A) Hindi (B) Maths (C) Science (D) English

Q.48: Who likes Maths but does not like English?

(A) Zaid (B) Rehan (C) Nasir (D) Karim

Q.49: Who does not like History but likes all other subjects?

(A) Karim (B) Feroz (C) Rehan (D) Nasir

Q.50: Which subject Zaid like but Karim do not like?

(A) Hindi (B) Science (C) Maths (D) English

Explanations for Question 51 to 55

- i) Salim & Kalim likes Football & Hockey**
- ii) Rahim & Salim likes Cricket & Hockey**
- iii) Kalim & Shoaib likes Volleyball but does not like Cricket**

Q.51: Who likes Hockey but does not like Football

- (A) Kalim (B) Rahim (C) Salim (D) Shoaib

Q.52: Who likes Volleyball but does not like Hokcey

- (A) Shoaib (B) Salim (C) Kalim (D) Rahim

Q.53: Who does not like Cricket but likes all other games?

- (A) Salim (B) Shoaib (C) Rahim (D) Kalim

Q.54: Who likes all games but does not like Volleyball?

- (A) Salim (B) Kalim (C) Rahim (D) Shoaib

Q.55: Who likes Football but does not like Cricket?

- (A) Rahim (B) Salim (C) Shoaib (D) Kalim

Part – 5: Direction Sense

Explanations for Question 56 to 60

Shoaib facing East walks 100 m, takes right turn and walks 300 m, then takes right turn again and walks 100 m, then turns left and walks another 50 m.

Q.56: How much distance Shoaib walked from last turn?

- (A) 150m (B) 50m (C) 100m (D) 450m

Q.57: How much distance Shoaib walked from starting point?

- (A) 100m (B) 150m (C) 350m (D) 550m

Q.58: Find shortest distance between starting point and current point?

- (A) 350m (B) 100m (C) 150m (D) 50m

Q.59: How much distance Shoaib walked from first turn?

(A) 450m (B) 550m (C) 150m (D) 50m

Q.60: Which direction the Shoaib is facing?

(A) South (B) North (C) East (D) West

Explanations for Question 61 to 65

Mohsin facing South walks 500m, takes right turn walks 250m, then again takes right turn walks another 500m, again takes right turn and walks another 270m.

Q.61: Which direction Mohsin is facing?

(A) South (B) East (C) West (D) North

Q.62: How much distance Mohsin walked after last turn?

(A) 770m (B) 20m (C) 500m (D) 270m

Q.63: How much distance Mohsin walked from starting point?

(A) 1500m (B) 1020m (C) 1520m (D) 1570m

Q.64: How much distance Mohsin walked after second turn?

(A) 500m (B) 270m (C) 1020m (D) 770m

Q.65: Find shortest distance between Starting point and current point?

(A) 20m (B) 70m (C) 270m (D) 250m

Explanations for Question 66 to 70

Zaid facing North walks 60m, then turns right walks 50m, then turns left and walks 25m, then turns right walks 20m, then turns right again and walks 85m, then turns right again and walks another 25m.

Q.66: Find shortest distance between starting point and current point?

(A) 25m (B) 35m (C) 50m (D) 45m

Q.67: How much distance Zaid walked from starting point?

(A) 250m (B) 265m (C) 205m (D) 180m

Q.68: Which direction Zaid is facing?
(A) West (B) East (C) North (D) South

Q.69: How much distance Zaid walked after first turn?
(A) 200m (B) 205m (C) 265m (D) 25m

Q.70: How much distance Zaid walked after last turn?
(A) 45m (B) 20m (C) 25m (D) 60m

Part – 6: General Knowledge / Current Affairs

Q.71: Who is current president of India?
(A) Dr. APJ Abdul Kalam (B) Ram Nath Kovind
(C) Narendra Modi (D) Droupadi Murmu

Q.72: Who won FIFA Men's World Cup 2022?
(A) India (B) France (C) Argentina (D) Brazil

Q.73: What is the meaning of GMAIL?
(A) Good Mail (B) Great Email (C) General Email (D) Google Mail

Q.74: Which is the national game of India?
(A) Hockey (B) Football (C) Cricket (D) Kabaddi

Q.75: What is the full form of A.T.M.?
(A) Automated Talking Machine (B) Automated Taking Machine
(C) Automated Teller Machine (D) Automated Tubular Machine

Q.76: What is the full form of L.E.D.?
(A) Light Emitting Diode (B) Low Emitting Diode
(C) Light Energy Diode (D) Light Emitting Destination

Q.77: Name the capital of Maharashtra?
(A) Nagpur (B) Mumbai (C) Pune (D) Thane

Q.78: What is the unit of Liquid?
(A) Meter (B) Kilogram (C) Celsius (D) Liter

Q.80: Which country do not share border with India?

(A) Myanmar (B) Iran (C) Bhutan (D) Pakistan

Q.80: On which date Chandrayan-3 landed near moon's south pole?

(A) 14-July-2023 (B) 15-Aug-2023 (C) 23-Aug-2023 (D) 27-Aug-2023

ALL THE BEST

Rough Work

Rough Work

Rough Work

Rough Work