

**KHIDMAT FOUNDATION TALENT TEST
(KFTT – JAN – 2023)**

Number of questions: 40

Duration: 1 Hour

1. All questions are compulsory

SET - D

Part – 1: Complete The Two Words

- Q.1: REMOT (?) NERGY
(A) E (B) N (C) R (D) A
- Q.2: SYSTE (?) AN
(A) C (B) R (C) P (D) M
- Q.3: CHAI (?) IGH T
(A) S (B) K (C) N (D) M
- Q.4: WAR (?) EXT
(A) D (B) T (C) S (D) N
- Q.5: STA (?) EAD
(A) R (B) L (C) T (D) G
- Q.6: CLON (?) SSAY
(A) U (B) E (C) V (D) P
- Q.7: REA (?) ISSILE
(A) M (B) N (C) T (D) L
- Q.8: MOUT (?) OUSE
(A) I (B) M (C) Y (D) H

Part – 2: Find number in place of “?”

Q.9:

X	1	4	
		12	?
1			6

- (A) 12 (B) 16 (C) 18 (D) 14

Q.10: X 1 11 11

		?	11

(A) 11 (B) 1 (C) 22 (D) 33

Q.11: X ? 8

	18	48	
		16	

(A) 4 (B) 3 (C) 2 (D) 1

Q.12: X

2			4
7			?

(A) 14 (B) 7 (C) 28 (D) 21

Q.13: X 5 ?

		27	
8		24	

(A) 8 (B) 24 (C) 3 (D) 2

Q.14: X 1 3

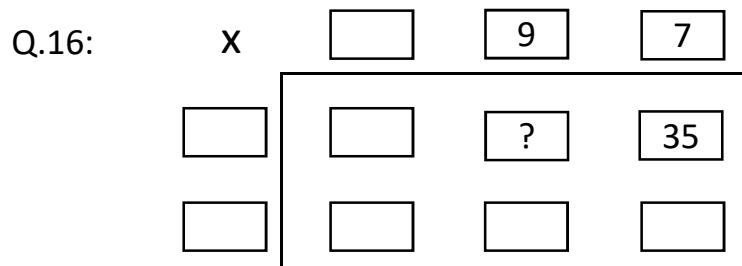
?			56
2			16

(A) 10 (B) 8 (C) 9 (D) 7

Q.15 X 6

3		6	
	?		20

(A) 40 (B) 50 (C) 20 (D) 30

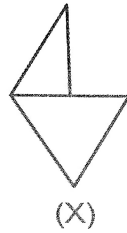


- (A) 45 (B) 5 (C) 36 (D) 81

Part – 3: Where is it hidden?

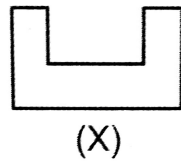
In which larger shape is the small shape (X) hidden?

Q.17:



- (A) (B) (C) (D)

Q.18:




- (A) (B) (C) (D)

Q.19:

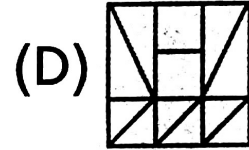
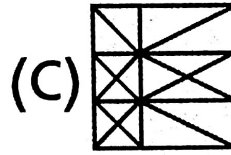
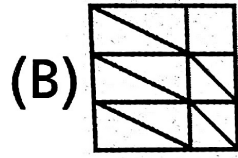
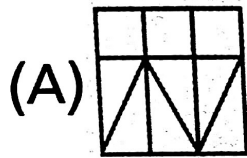


- (A) (B) (C) (D)

Q.20:



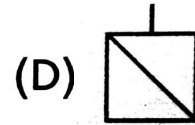
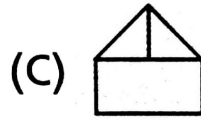
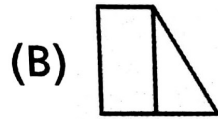
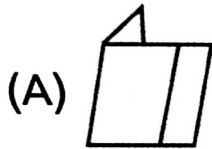
(X)



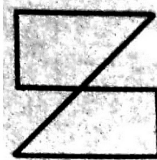
Q.21



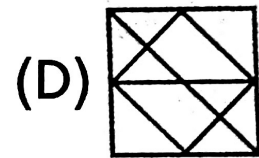
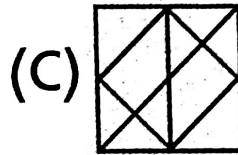
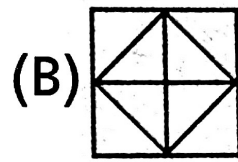
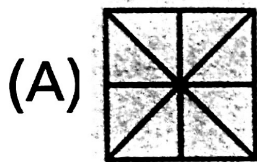
(X)




Q.22:



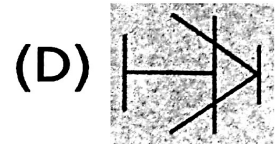
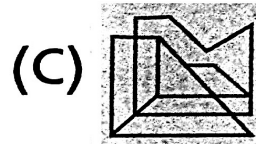
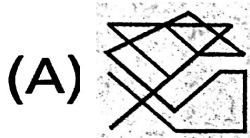
(X)



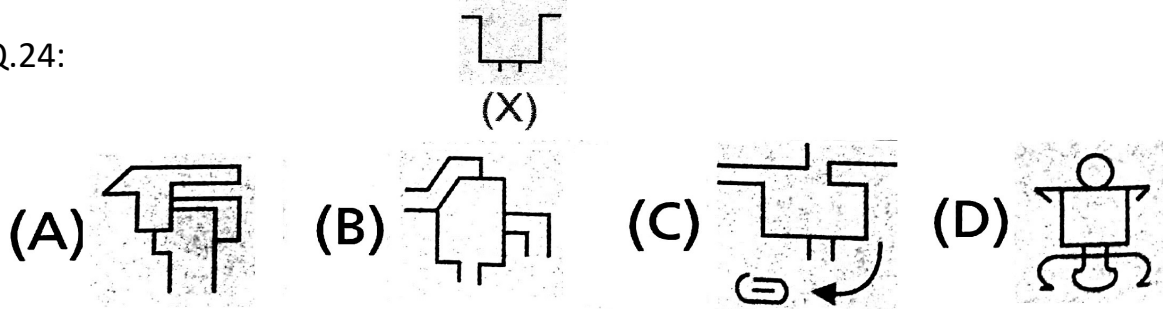
Q.23:



(X)



Q.24:



Part – 4: Mathematical Reasoning

Q.25: How many even numbers are there in the following series which are not divided by 2?

2 1 4 8 6 7 1 3 5 9 2 1 3 5

- (A) 0 (B) 9 (C) 5 (D) 4

Q.26: How many numbers are there in the following series which are divided by either 2 or 3?

3 1 5 3 6 7 8 2 9 1 7 5 4 2 4 1

- (A) 9 (B) 0 (C) 7 (D) 6

Q.27: How many odd numbers are there in the following series which are divisible only by 3?

2 5 9 5 6 6 3 9 5 7 1 7 8 9 5 3 2 4

- (A) 4 (B) 3 (C) 10 (D) 5

Q.28: How many even numbers are there in the following series which are divided by 2 but not divided by 3?

5 8 6 9 4 2 1 3 9 6 5 7 8 2 1 7 9 4

- (A) 8 (B) 5 (C) 6 (D) 3

Q.29: How many 3's are there in the following series which are preceded by 1 and followed by 9?

1 3 5 0 2 1 3 9 9 1 2 3 9 6 1 3 9 5 8

- (A) 0 (B) 2 (C) 4 (D) 1

Q.30: How many 4's are there in the following series which are preceded by 6 but not followed by 6?

7 4 9 6 4 1 6 4 6 8 9 1 4 0 4 6 9

- (A) 4 (B) 3 (C) 2 (D) 1

Q.31: How many numbers are there in the following series which are preceded by 3 or 1 and followed by 2?

5 8 3 8 2 0 1 7 2 9 7 1 3 5 4 6

- (A) 1 (B) 3 (C) 2 (D) 4

Q.32: How many 4's are there in the following series which are preceded by a number which divides it and followed by a number which does not divide it?

2 1 4 7 2 4 1 0 4 2 7 1 4 4 3 1 4 2

- (A) 1 (B) 4 (C) 2 (D) 3

Part – 5: Find Mirror Images

Q.33: Find mirror image of "8 0 0 8 0"

- (A) 8 0 0 8 0 (B) 8 0 8 0 0
 (C) 0 8 0 0 8 (D) 8 0 0 0 8

Q.34: Find mirror image of "5 8 9 1 6"

- (A) ɹ 8 e 1 6 (B) 6 1 e 8 5
 (C) 5 8 e 1 ɹ (D) ɹ 1 e 8 ɹ

Q.35: Find mirror image of "2 0 5 9 3"

- (A) ε e ɹ 0 Ϛ (B) 3 9 ɹ 0 2
 (C) 3 9 ɹ 0 Ϛ (D) ε e 5 0 Ϛ

Q.36: Find mirror image of "7 8 8 7 9"

- (A) e 7 8 8 ɿ (B) e ɿ 8 8 ɿ
 (C) 9 7 8 8 7 (D) 9 ɿ 8 8 ɿ

Q.37: Find mirror image of "P E N C I L"

- (A) ǀ ǀ ǀ ǀ ǀ ǀ ǀ (B) L I ǀ N E ǀ
 (C) L I ǀ C I E ǀ (D) ǀ I ǀ I E ǀ ǀ

Q.38: Find mirror image of "I N D I A"

- (A) A I ǀ I D I (B) I N D I A
 (C) A I ǀ I I (D) I ǀ I D I A

Q.39: Find mirror image of "P R O P E R"

- (A) ɹ E ǀ O ɹ ǀ (B) ɹ E ǀ O ɹ ǀ
 (C) P R O ǀ E ɹ (D) ǀ ɹ O ǀ E ɹ

Q.40: Find mirror image of "M A T H S"

- (A) 2 H T A M (B) M A T H S
 (C) S H T A M (D) M A T H 2

Rough Work

Rough Work