

**KHIDMAT FOUNDATION TALENT TEST
(KFTT – JAN – 2023)**

Number of questions: 40

Duration: 1 Hour

1. All questions are compulsory

SET - A

Part – 1: Complete The Two Words

Q.1: CHAI (?) IGH T

(A) S (B) N (C) K (D) M

Q.2: WAR (?) EXT

(A) D (B) T (C) N (D) S

Q.3: STA (?) EAD

(A) T (B) R (C) L (D) G

Q.4: CLON (?) SSAY

(A) U (B) V (C) E (D) P

Q.5: REA (?) ISSILE

(A) L (B) N (C) T (D) M

Q.6: MOUT (?) OUSE

(A) I (B) M (C) H (D) Y

Q.7: REMOT (?) NERGY

(A) R (B) N (C) A (D) E

Q.8: SYSTE (?) AN

(A) C (B) M (C) P (D) R

Part – 2: Find number in place of “?”

Q.9:

x	6		4
3		6	
	?		20

(A) 20 (B) 30 (C) 40 (D) 50

Q.10: x

<input type="text"/>	<input type="text" value="18"/>	<input type="text" value="48"/>	<input type="text"/>
<input type="text"/>	<input type="text"/>	<input type="text" value="16"/>	<input type="text"/>

(A) 1 (B) 2 (C) 3 (D) 4

Q.11: x | |

<input type="text" value="2"/>	<input type="text"/>	<input type="text"/>	<input type="text" value="4"/>
<input type="text" value="7"/>	<input type="text"/>	<input type="text"/>	<input type="text" value="?"/>

(A) 21 (B) 7 (C) 28 (D) 14

Q.12: x | |

<input type="text"/>	<input type="text"/>	<input type="text" value="27"/>	<input type="text"/>
<input type="text" value="8"/>	<input type="text"/>	<input type="text" value="24"/>	<input type="text"/>

(A) 3 (B) 24 (C) 8 (D) 2

Q.13: x | |

<input type="text"/>	<input type="text"/>	<input type="text"/>	<input type="text"/>
<input type="text"/>	<input type="text"/>	<input type="text" value="?"/>	<input type="text" value="11"/>

(A) 1 (B) 11 (C) 22 (D) 33

Q.14: x | |

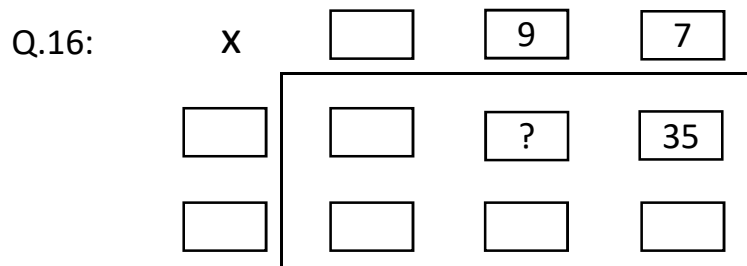
<input type="text" value="?"/>	<input type="text"/>	<input type="text"/>	<input type="text" value="56"/>
<input type="text" value="2"/>	<input type="text"/>	<input type="text"/>	<input type="text" value="16"/>

(A) 7 (B) 8 (C) 9 (D) 10

Q.15 x | |

<input type="text"/>	<input type="text"/>	<input type="text" value="12"/>	<input type="text" value="?"/>
<input type="text" value="1"/>	<input type="text"/>	<input type="text"/>	<input type="text" value="6"/>

(A) 12 (B) 16 (C) 14 (D) 18



- (A) 5 (B) 45 (C) 36 (D) 81

Part – 3: Where is it hidden?

In which larger shape is the small shape (X) hidden?



- (A) (B) (C) (D)




- (A) (B) (C) (D)



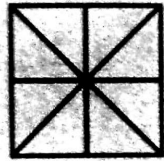
- (A) (B) (C) (D)

Q.20:

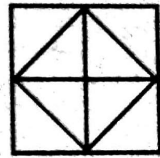


(X)

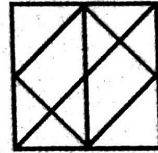
(A)



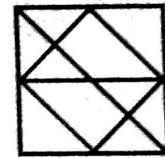
(B)




(C)



(D)

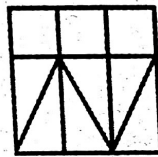


Q.21:

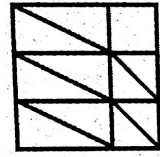


(X)

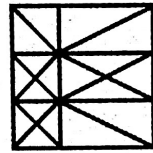
(A)



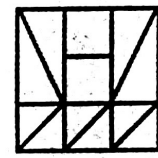
(B)



(C)



(D)



Q.22:

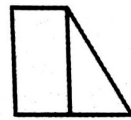


(X)

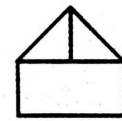
(A)



(B)




(C)



(D)

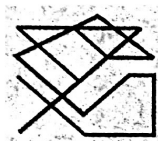


Q.23:

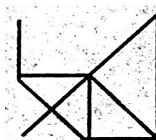


(X)


(A)



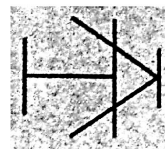
(B)



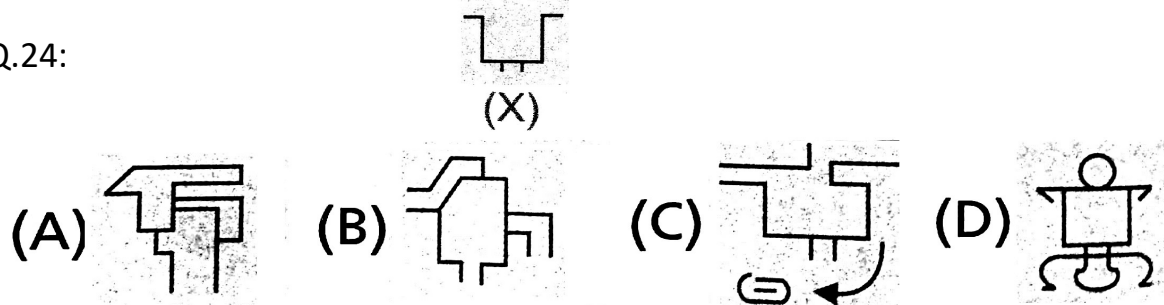
(C)



(D)



Q.24:



Part – 4: Mathematical Reasoning

Q.25: How many odd numbers are there in the following series which are divisible only by 3?

2 5 9 5 6 6 3 9 5 7 1 7 8 9 5 3 2 4

- (A) 4 (B) 3 (C) 5 (D) 10

Q.26: How many even numbers are there in the following series which are divided by 2 but not divided by 3?

5 8 6 9 4 2 1 3 9 6 5 7 8 2 1 7 9 4

- (A) 6 (B) 5 (C) 8 (D) 3

Q.27: How many 3's are there in the following series which are preceded by 1 and followed by 9?

1 3 5 0 2 1 3 9 9 1 2 3 9 6 1 3 9 5 8

- (A) 0 (B) 1 (C) 4 (D) 2

Q.28: How many 4's are there in the following series which are preceded by 6 but not followed by 6?

7 4 9 6 4 1 6 4 6 8 9 1 4 0 4 6 9

- (A) 1 (B) 2 (C) 3 (D) 4

Q.29: How many even numbers are there in the following series which are not divided by 2?

2 1 4 8 6 7 1 3 5 9 2 1 3 5

- (A) 5 (B) 9 (C) 0 (D) 4

Q.30: How many numbers are there in the following series which are divided by either 2 or 3?

3 1 5 3 6 7 8 2 9 1 7 5 4 2 4 1

- (A) 6 (B) 0 (C) 7 (D) 9

Q.31: How many numbers are there in the following series which are preceded by 3 or 1 and followed by 2?

5 8 3 8 2 0 1 7 2 9 7 1 3 5 4 6

- (A) 2 (B) 3 (C) 1 (D) 4

Q.32: How many 4's are there in the following series which are preceded by a number which divides it and followed by a number which does not divide it?

2 1 4 7 2 4 1 0 4 2 7 1 4 4 3 1 4 2

- (A) 1 (B) 4 (C) 3 (D) 2

Part – 5: Find Mirror Images

Q.33: Find mirror image of "P E N C I L"

- (A) J I C N E 9 (B) L I C N E 9
 (C) L I C N E 9 (D) J I C N E 9

Q.34: Find mirror image of "I N D I A"

- (A) A I N D I (B) I N D I A
 (C) A I D I I (D) I N D I A

Q.35: Find mirror image of "P R O P E R"

- (A) Я E 9 O R 9 (B) Я E 9 O R 9
 (C) P R O 9 E Я (D) 9 Я O 9 E R

Q.36: Find mirror image of "M A T H S"

- (A) 2 H T A M (B) M A T H S
 (C) S H T A M (D) M A T H 2

Q.37: Find mirror image of "5 8 9 1 6"

- (A) 2 8 e 1 6 (B) 6 1 e 8 5
 (C) 5 8 e 1 6 (D) 6 1 e 8 5

Q.38: Find mirror image of "2 0 5 9 3"

- (A) 3 9 2 0 2 (B) 3 9 2 0 2
 (C) 3 9 2 0 2 (D) 3 9 2 0 2

Q.39: Find mirror image of "7 8 8 7 9"

- (A) e 7 8 8 7 (B) e 7 8 8 7
 (C) 9 7 8 8 7 (D) 9 7 8 8 7

Q.40: Find mirror image of "8 0 0 8 0"

- (A) 8 0 0 8 0 (B) 8 0 8 0 0
 (C) 0 8 0 0 8 (D) 8 0 0 0 8

Rough Work

Rough Work